



Name :

Date :

Grade : |

Worksheet










Submission Date :

Subject : Math

Parent's sign :

## Numbers 1 to 20

I.Count and fill in the blanks with the number.

		
<input type="text"/>	<input type="text"/>	<input type="text"/>
		
<input type="text"/>	<input type="text"/>	<input type="text"/>
		
<input type="text"/>	<input type="text"/>	<input type="text"/>

II. Write the number names.

- a. 20- \_\_\_\_\_
- b. 17- \_\_\_\_\_
- c. 19- \_\_\_\_\_
- d. 15- \_\_\_\_\_

**III. Fill in the blanks with '>', '<', or '='.**

a)  $2 \square 1$

c)  $18 \square 18$

b)  $7 \square 4$

d)  $19 \square 20$

**IV. Choose the correct answer(s).**

1. Number that comes one before 6

- a) 7    b) 5    c) 9    d) 2

2. Number that comes one after 2

- a) 2    b) 10    c) 3    d) 7

3. Numbers that come between 12 and 14

- a) 11    b) 15    c) 7    d) 13

**V. Circle the correct answer.**

1. Arrange the following numbers in ascending order: 4, 2, 6, 9

- A) 4, 2, 6, 9    B) 1, 4, 9, 6    C) 2, 4, 6, 9    D) 9, 6, 4, 2

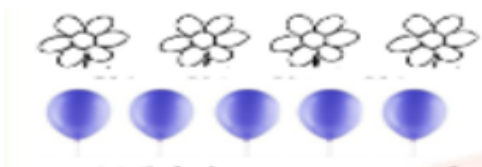
2. Arrange the numbers in descending order 14, 19, 20, 11

- A) 20 19 14 11    B) 11 14 19 20    C) 20 14 19 11    D) 11 20 19 14

3. Number 19 has \_\_\_\_\_ tens, \_\_\_\_\_ ones

- A) 9 tens 1 ones    B) 9 ones 9 ones    C) 1 tens 9 ones    D) 1 tens 1 ones

4. Sumit has the following flowers and balloons.



Which statement is true?

- A. Flowers are more than balloons.    C. Flowers are equal to balloons.  
B. Flowers are less than balloons.    D. Balloons are 2 more than flowers.